
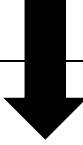










Algebra Review Assignment 1: Algebra Scavenger Hunt

Name _____ Group # _____

 Card # _____	 Card # _____
 Card # _____	 Card # _____
 Card # _____	 Card # _____
 Card # _____	 Card # _____
 Card # _____	 Card # _____

14

Solve for x:

$$**x + 8 = 30**$$

22

Solve for x:

$$2x - 14 = 80$$

28

Solve for x :

$$4x + 8 = 6x - 20$$

19

Solve for x:

$$2(x + 4) = 32$$

12

Solve for x:

$$\frac{x}{14} + 8 = 10$$

13

Solve for x:

$$30 - 2x = -8$$

47

Solve for x:

$$x + 8 = 2(x + 4)$$

8

Solve for x :

$$2(x - 4) = 4(7 - x)$$

6

Solve for x:

$$45 = 5(x - 4)$$

0

Solve for x:

$$3x = 2(x + 4)$$